



Measuring Weight | Metric Units

- 1) Fiona finds the weight of an empty bird feeder.
She then fills it with bird seeds.
What is the weight of the seeds?



The weight of the seeds: _____

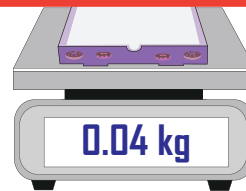
- 2) Naomi measures the weight of an empty carton

- 3) D
H
W
Th
4) Jo
H
What is the weight of the donuts?

Preview

**Become a member to unlock
unrestricted access to both printable
and online worksheets.**

www.tutoringhour.com



The weight of the donuts: _____

- 5) Clara wants to pack some cookies in a box.
She measures the weight of an empty box and
then fills the box with cookies.
What is the weight of the cookies?



The weight of the cookies: _____