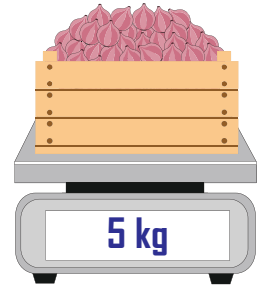
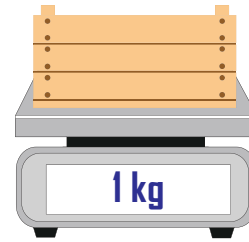



Measuring Weight | Metric Units

- 1) Jaden finds the weight of an empty crate.
He then fills the crate with onions.
What is the weight of the onions?



The weight of the onions: _____

- 2) Aunt Sally measures the weight of an empty box.



- 3) Zoey
th
W
Th
4) O
H

Preview

**Become a member to unlock
unrestricted access to both printable
and online worksheets.**

www.tutoringhour.com





What is the weight of the teddy bears?



The weight of the teddy bears: _____

- 5) Rachel measures the weight of an empty basket.
She then fills the basket with lemons.
What is the weight of the lemons?



The weight of the lemons: _____