



# Measuring Weight | KG and G

Observe the scales and write the weight of each object.

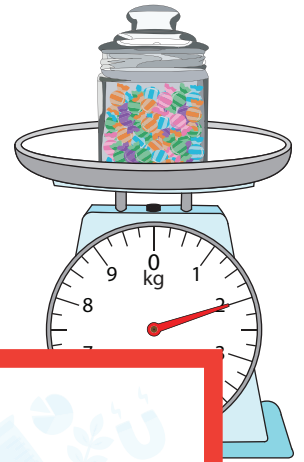
1)



2)



3)



4)


## Preview

Become a member to unlock  
unrestricted access to both printable  
and online worksheets.

www.tutoringhour.com




7)




\_\_\_\_\_ kg

8)



\_\_\_\_\_ g

9)



\_\_\_\_\_ kg