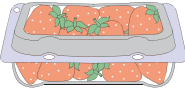







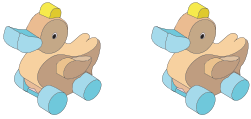



Measuring Weight | Metric Units

Write the weight of each individual object.

1)	 = 	 = _____ g
2)	<div style="border: 2px solid red; padding: 10px;"> <h2 style="color: blue;">Preview</h2> <p style="color: blue; font-weight: bold;">Become a member to unlock unrestricted access to both printable and online worksheets.</p>  <p>www.tutoringhour.com</p> </div>	
3)		
4)	 = 	 = _____ kg
5)	 = 	 = _____ g