




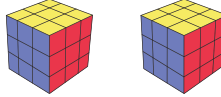






Measuring Weight | Metric Units

Write the weight of each individual object.

1)	 <p>700 g</p>	 <p>=</p>  <p>= _____ g</p>
2)	<div style="border: 2px solid red; padding: 10px;"> <h2 style="color: blue; font-size: 2em;">Preview</h2> <p style="color: blue; font-size: 1.2em;">Become a member to unlock unrestricted access to both printable and online worksheets.</p> <p style="color: blue; font-size: 1.1em;">www.tutoringhour.com</p>  </div>	
3)		
4)	 <p>200 g</p>	 <p>=</p>  <p>= _____ g</p>
5)	 <p>800 g</p>	 <p>=</p>  <p>= _____ g</p>