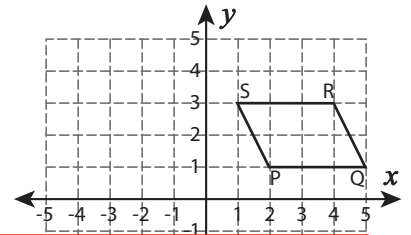
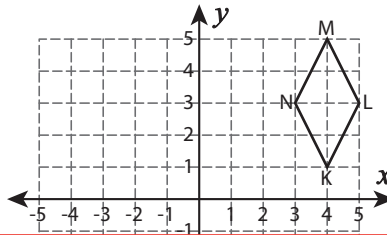
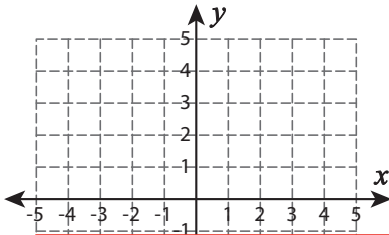


Translation

Graph the image of each figure after the given translation. Also write the coordinates of the image.

- 1) 5 units up and 3 units right 2) 7 units left and 6 units down 3) 6 units left



Preview

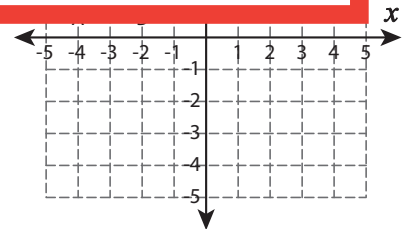
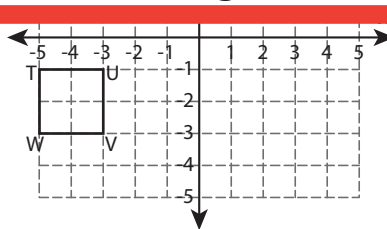
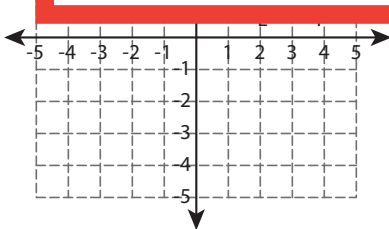
Become a member to unlock
unrestricted access to both printable
and online worksheets.



www.tutoringhour.com

4) 2 u

right



E'	
F'	
G'	

T'	
U'	
V'	
W'	

A'	
B'	
C'	
D'	