

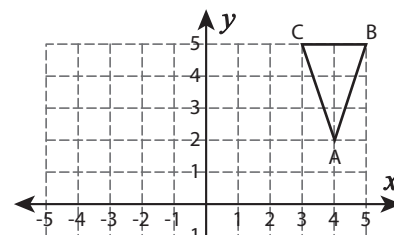
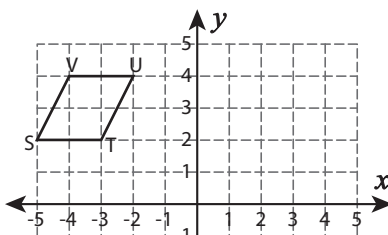
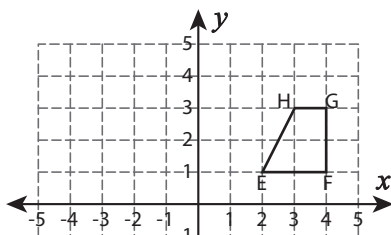
Translation

Graph the image of each figure after the given translation. Also write the coordinates of the image.

1) 3 units down

2) 2 units down and 7 units right

3) 7 units down and 1 unit left



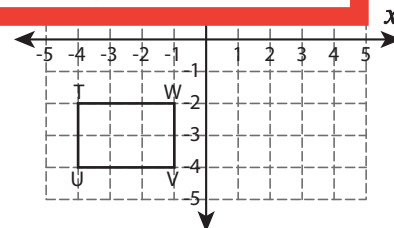
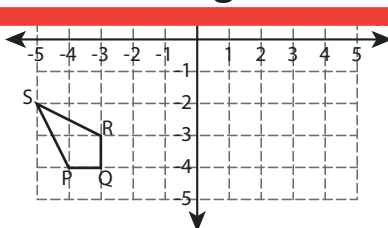
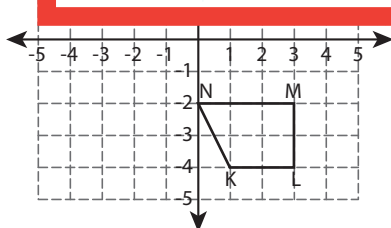
Preview

Become a member to unlock
unrestricted access to both printable
and online worksheets.



www.tutoringhour.com

4) 4 u



K'	
L'	
M'	
N'	

P'	
Q'	
R'	
S'	

T'	
U'	
V'	
W'	