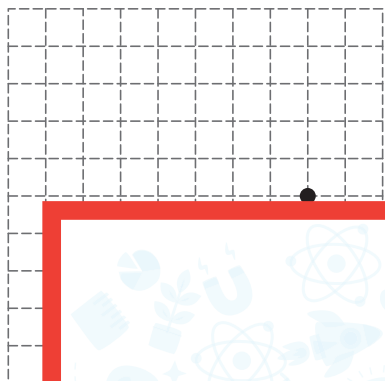


# Translation of a Point

Graph the new position of each point using the translation given.

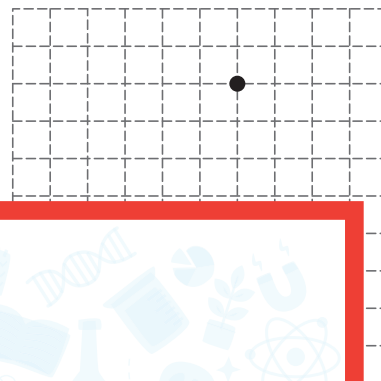
1) 6 units left and 4 units up



2) 5 units right



3) 2 units left and 4 units down



## Preview

Become a member to unlock  
unrestricted access to both printable  
and online worksheets.

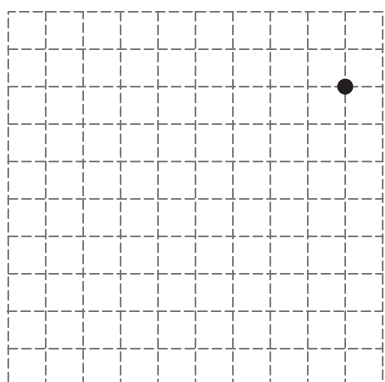


[www.tutoringhour.com](http://www.tutoringhour.com)

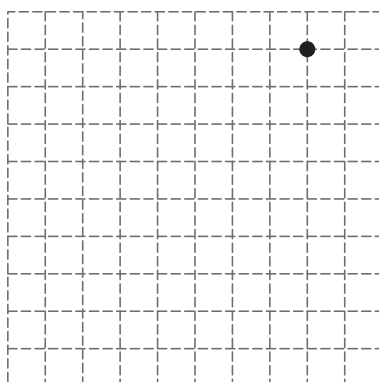
4) 7



7) 8 units left and 7 units down



8) 6 units down and 6 units left



9) 1 unit down and 3 units left

