


Translation of a Point

Graph the new position of each point using the translation given.


1) 1 unit right and 7 units up



2) 8 units left and 6 units down



3) 5 units up and 4 units left



Preview

Become a member to unlock
unrestricted access to both printable
and online worksheets.

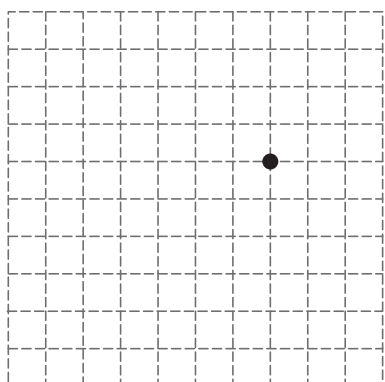


www.tutoringhour.com


4) 3 u



7) 3 units left



8) 2 units left and 7 units up



9) 1 unit down and 3 units right

