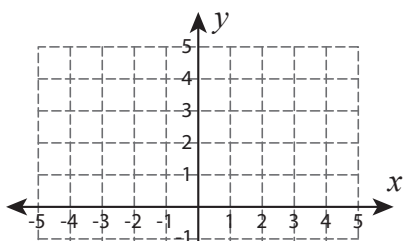


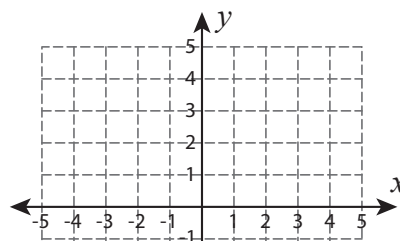
Rotation of a Point

Graph the new position of each point after rotating it about the origin.

1) 90° clockwise rotation



2) 90° counterclockwise rotation



Preview

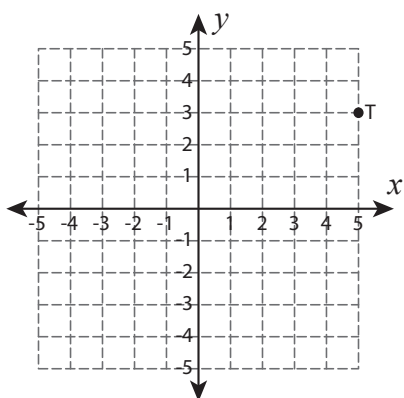
Become a member to unlock
unrestricted access to both printable
and online worksheets.



www.tutoringhour.com

3) 180°

5) 90° counterclockwise rotation



6) 180° rotation

