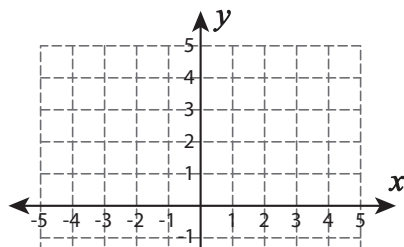


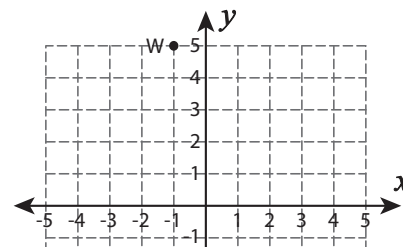
# Reflecting a Point

Graph the new position of each point after the given reflection.

1) Reflection across the line  $y = x$



2) Reflection across the line  $y = 4$



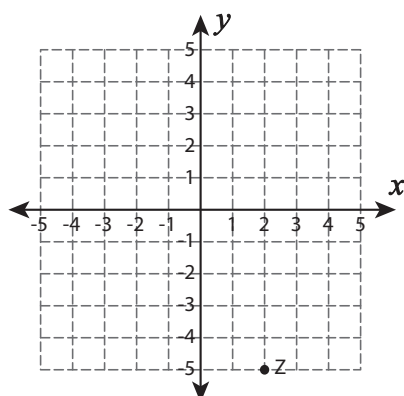
# Preview

Become a member to unlock  
unrestricted access to both printable  
and online worksheets.



[www.tutoringhour.com](http://www.tutoringhour.com)

5) Reflection across the line  $y = -1$



6) Reflection across the line  $x = -6$

