

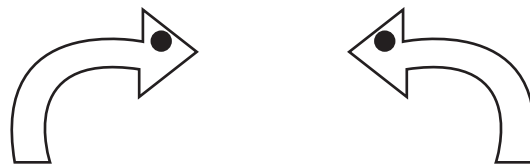
Transformation

A) Identify and write the type of transformation.

1)



2)



3)



4)

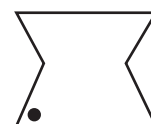
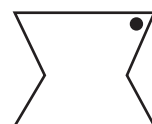
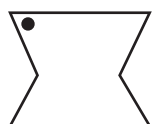


B) Choose the correct image which shows the transformation of each figure.

1) Reflection of



?




2) Translation of



?



3) Rotation of



?

