


# Telling Time


A) Read each clock and write the time.

1)



\_\_\_\_\_

2)



\_\_\_\_\_

3)




\_\_\_\_\_

4)




\_\_\_\_\_

5)



\_\_\_\_\_

6)




\_\_\_\_\_

B) 1) Choose the clock that shows 3:00.


a)



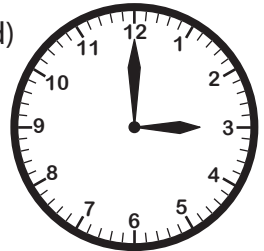
b)



c)



d)




2) Choose the clock that shows 10:00.

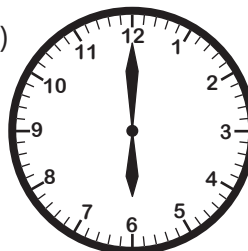
a)



b)



c)



d)

