

# Telling Time

A) Read each clock and write the time.

1)



\_\_\_\_\_

2)




\_\_\_\_\_

3)




\_\_\_\_\_

4)



\_\_\_\_\_

5)



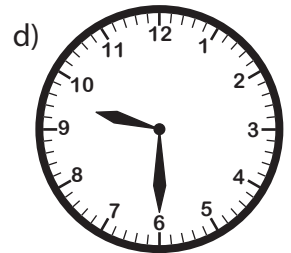
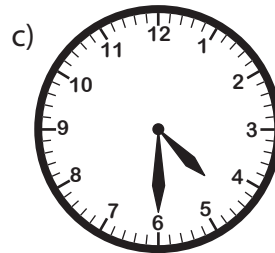
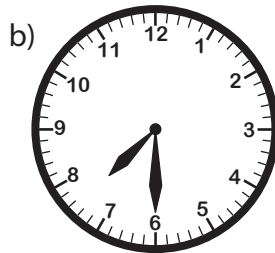
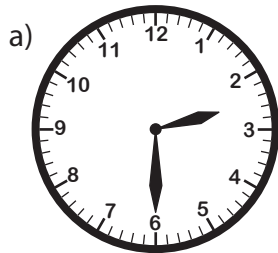
\_\_\_\_\_

6)



\_\_\_\_\_

B) 1) Choose the clock that shows 7:30.



2) Choose the clock that shows 11:30.

