

# Telling Time

A) Read each clock and write the time.


1)



2)



3)



4)

# Preview

Become a member to unlock  
unrestricted access to both printable  
and online worksheets.


B)

[www.tutoringhour.com](http://www.tutoringhour.com)

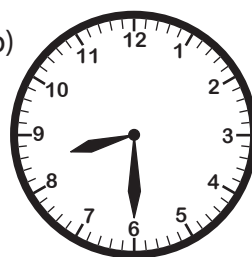


2) Choose the clock that shows 11:30.


a)



b)



c)



d)

