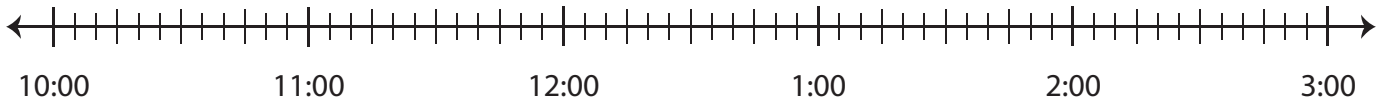


Elapsed Time

Draw hops on each number line and find the elapsed time.

- 1) Start time: 10:55 a.m. End time: 1:20 p.m.



Elapsed time: _____

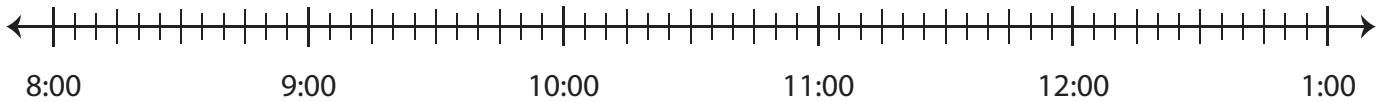
- 2) S



- 3) S

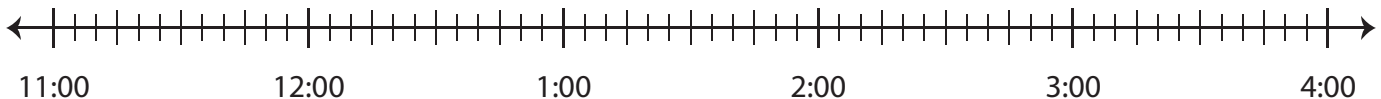


- 4) S



Elapsed time: _____

- 5) Start time: 11:40 p.m. End time: 2:40 a.m.



Elapsed time: _____

Preview

Become a member to unlock
unrestricted access to both printable
and online worksheets.



www.tutoringhour.com