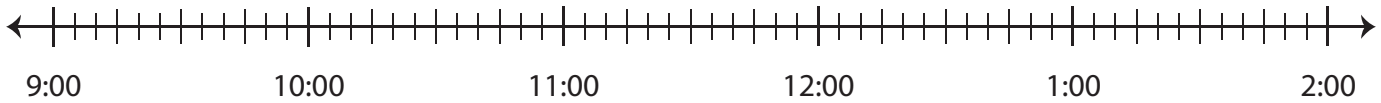


Elapsed Time

Draw hops on each number line and find the elapsed time.

- 1) Start time: 9:10 a.m. End time: 12:40 p.m.



Elapsed time: _____

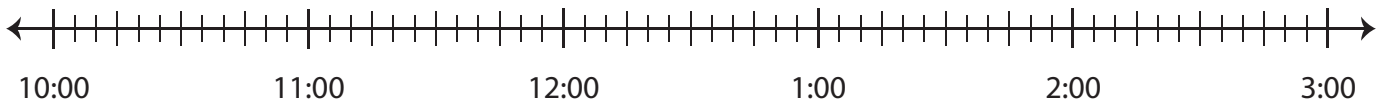
2) S



3) S

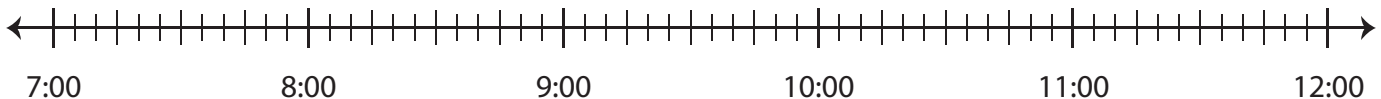


4) S



Elapsed time: _____

- 5) Start time: 9:25 a.m. End time: 12:00 p.m.



Elapsed time: _____

Preview

Become a member to unlock
unrestricted access to both printable
and online worksheets.



www.tutoringhour.com