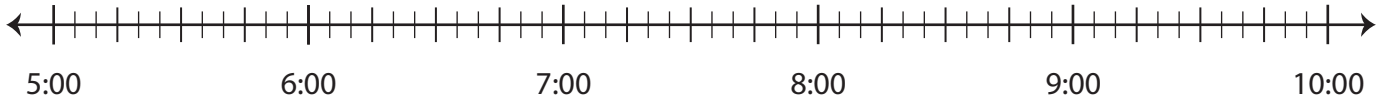


# Elapsed Time

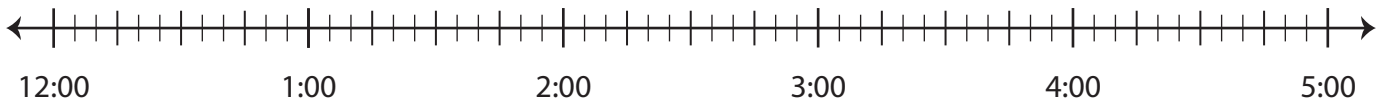
Draw hops on each number line and find the elapsed time.

- 1) **Start time:** 6:40 a.m. **End time:** 8:00 a.m.



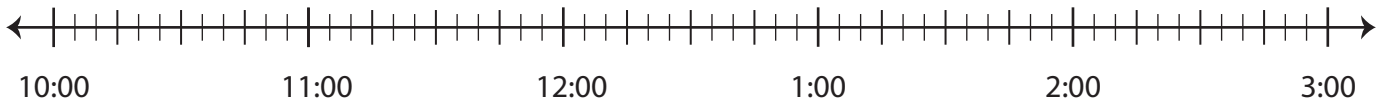
**Elapsed time:** \_\_\_\_\_

- 2) **Start time:** 1:15 p.m. **End time:** 4:10 p.m.



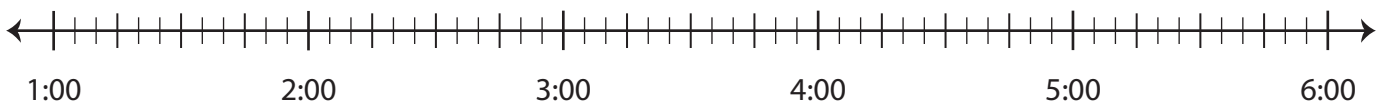
**Elapsed time:** \_\_\_\_\_

- 3) **Start time:** 11:05 a.m. **End time:** 11:55 a.m.



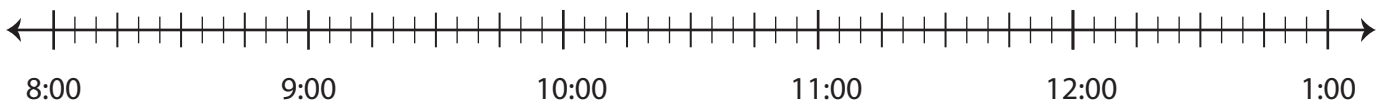
**Elapsed time:** \_\_\_\_\_

- 4) **Start time:** 2:00 a.m. **End time:** 5:25 a.m.



**Elapsed time:** \_\_\_\_\_

- 5) **Start time:** 9:50 p.m. **End time:** 11:35 p.m.



**Elapsed time:** \_\_\_\_\_