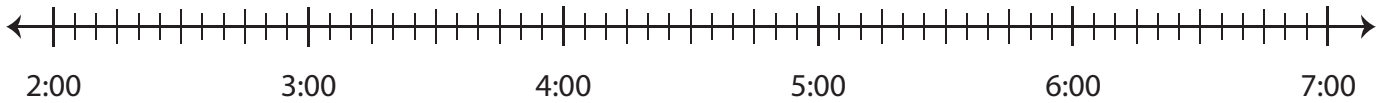


# Elapsed Time

Draw hops on each number line and find the elapsed time.

- 1) Start time: 3:05 p.m. End time: 6:45 p.m.



Elapsed time: \_\_\_\_\_

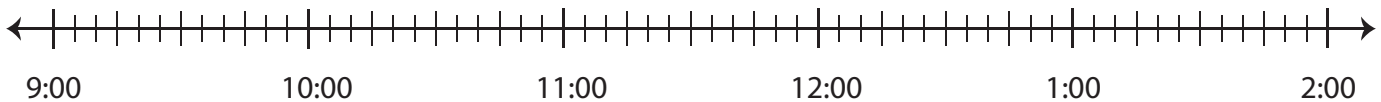
2) S



3) S

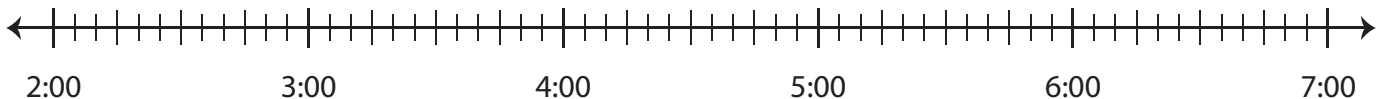


4) S



Elapsed time: \_\_\_\_\_

- 5) Start time: 2:50 a.m. End time: 6:55 a.m.



Elapsed time: \_\_\_\_\_

**Preview**

Become a member to unlock  
unrestricted access to both printable  
and online worksheets.



[www.tutoringhour.com](http://www.tutoringhour.com)