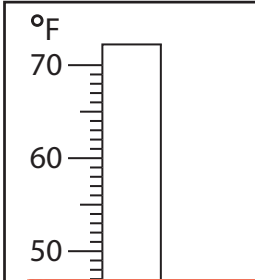


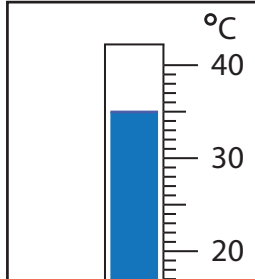
Rise and Fall in Temperatures

Find the new reading if the temperature

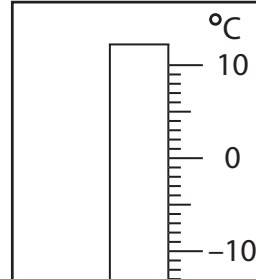
1) rises by 40°F .



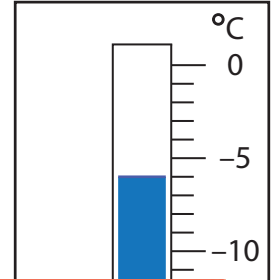
2) rises by 3°C .



3) falls by 24°C .



4) falls by 17°C .



Preview

Become a member to unlock
unrestricted access to both printable
and online worksheets.



www.tutoringhour.com

5) fa

