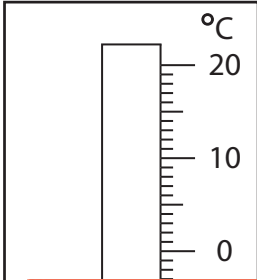


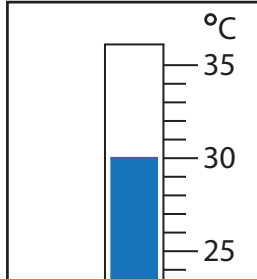
Rise and Fall in Temperatures

Find the new reading if the temperature

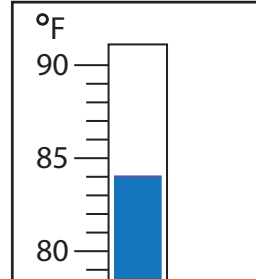
1) rises by 13°C .



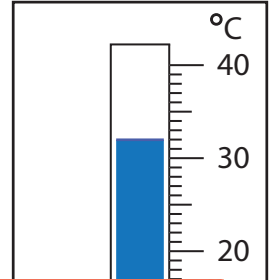
2) falls by 20°C .



3) falls by 15°F .



4) rises by 6°C .



Preview

Become a member to unlock
unrestricted access to both printable
and online worksheets.



www.tutoringhour.com

5) fa

