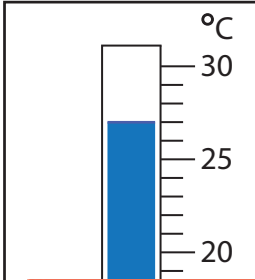


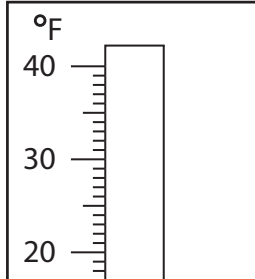
# Rise and Fall in Temperatures

Find the new reading if the temperature

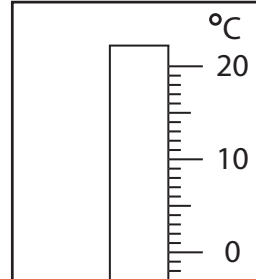
1) falls by  $9^{\circ}\text{C}$ .



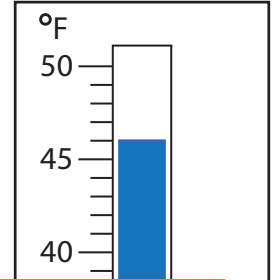
2) rises by  $22^{\circ}\text{F}$ .



3) rises by  $11^{\circ}\text{C}$ .



4) falls by  $20^{\circ}\text{F}$ .



## Preview

Become a member to unlock  
unrestricted access to both printable  
and online worksheets.



[www.tutoringhour.com](http://www.tutoringhour.com)

5) ri

