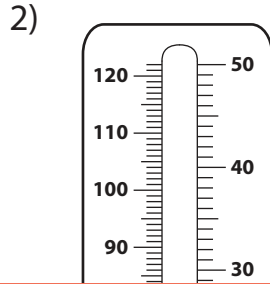
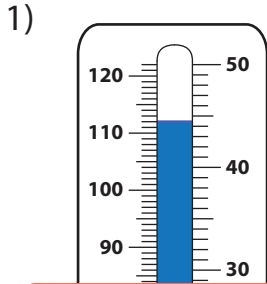
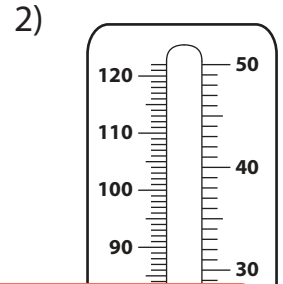
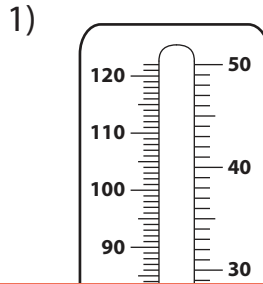


# Temperatures - Mixed Bag

A) Write the temperature shown on each thermometer.



B) Shade the thermometer according to the given temperature.



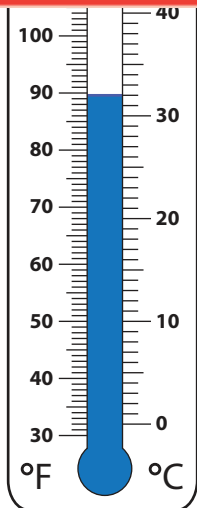
# Preview

Become a member to unlock  
unrestricted access to both printable  
and online worksheets.



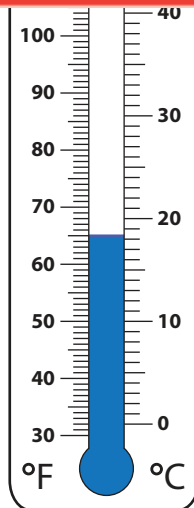
[www.tutoringhour.com](http://www.tutoringhour.com)

C) R  
1)



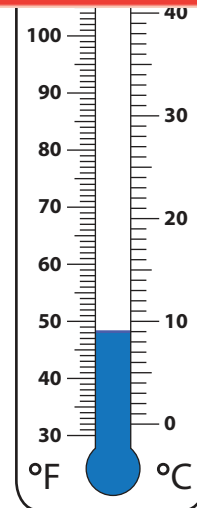
35°C

32°C



67°F

62°F



9°C

11°C