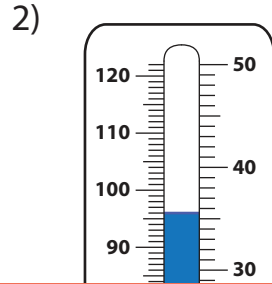
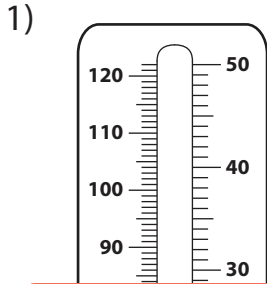
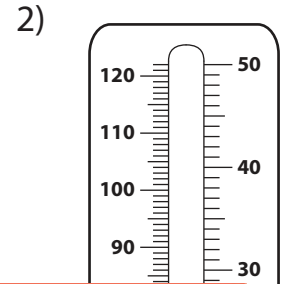
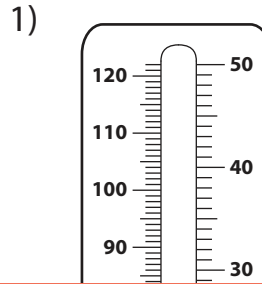


Temperatures - Mixed Bag

A) Write the temperature shown on each thermometer.



B) Shade the thermometer according to the given temperature.



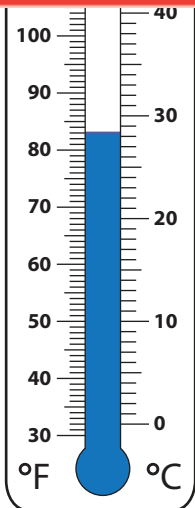
Preview

Become a member to unlock
unrestricted access to both printable
and online worksheets.



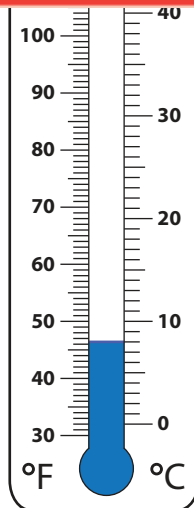
www.tutoringhour.com

C) R
1)



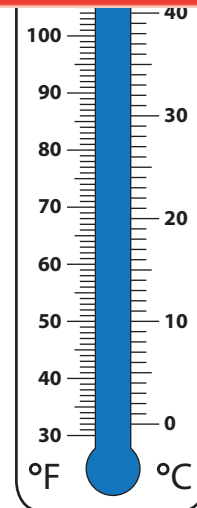
83°F

86°F



6°C

8°C



113°F

120°F