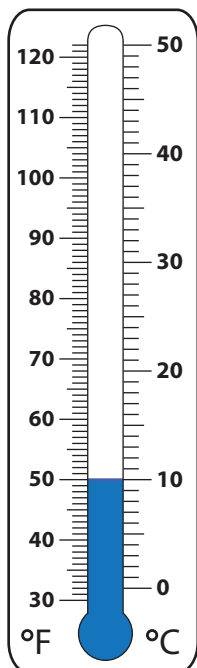


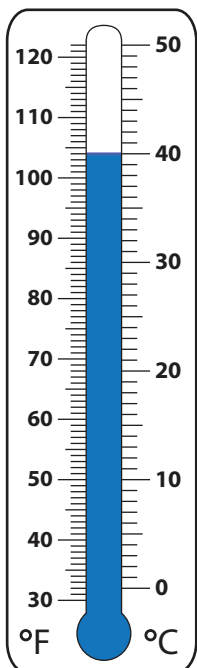
# Measuring and Comparing Temperatures

Observe the temperature trends across five states and answer the questions that follow.

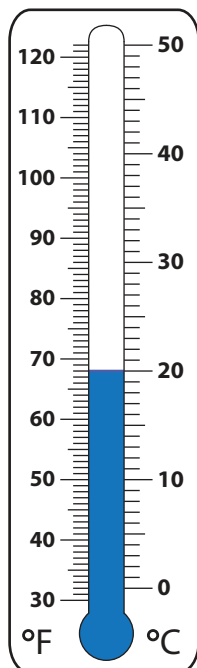
Temperature Trends Across Five States



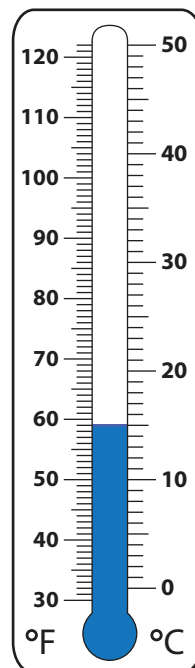
Missouri



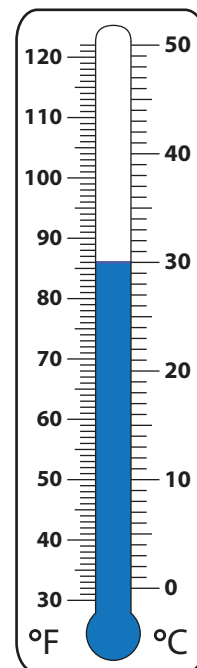
Alabama



Florida



Hawaii



New York

1) Which state is hotter: Florida or Hawaii?

\_\_\_\_\_

2) Which state is the warmest?

\_\_\_\_\_

3) What is the temperature of Alabama in Celsius?

\_\_\_\_\_

4) What is the temperature of New York in Fahrenheit?

\_\_\_\_\_

5) How much colder is Missouri than Florida in Fahrenheit?

\_\_\_\_\_