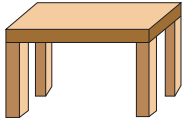
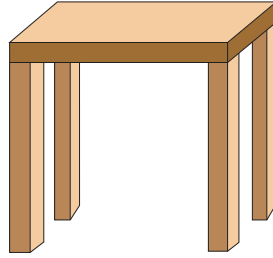


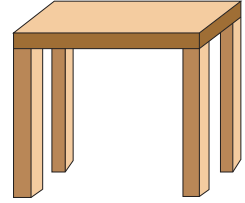
# Tall vs. Short

A) Write 1, 2, and 3 to order the objects from shortest to tallest.

1)








2)

## Preview

Become a member to unlock  
unrestricted access to both printable  
and online worksheets.



[www.tutoringhour.com](http://www.tutoringhour.com)

B) W



