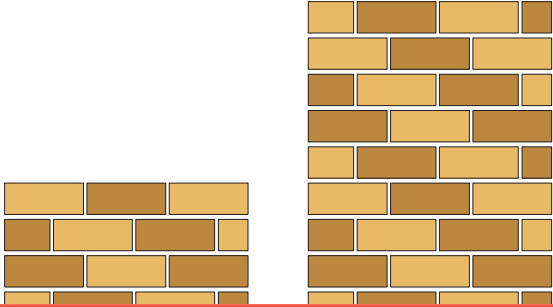
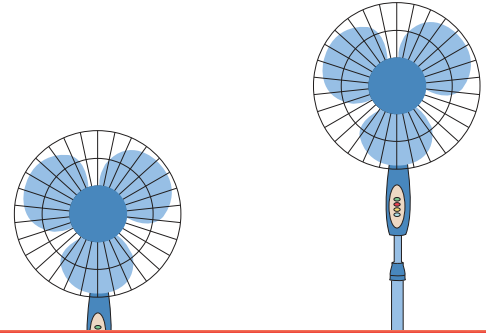


# Tall vs. Short

1) Which is shorter?



2) Which is taller?




# Preview

Become a member to unlock  
unrestricted access to both printable  
and online worksheets.

[www.tutoringhour.com](http://www.tutoringhour.com)

3) Which is taller?



5) Which is shorter?

