

# Tall vs. Short

1) Justin observes the heights of two trees. Which is the shorter of the two?

2) Irene and Isabella are stacking coins from their piggy banks. Whose coin tower is taller?



## Preview





Become a member to unlock  
unrestricted access to both printable  
and online worksheets.



[www.tutoringhour.com](http://www.tutoringhour.com)

3) M  
t

r  
and



Helena's Bookshelf    Henry's Bookshelf