




# Tall vs. Short

A) Look at the first object in each set and compare it with the other two.  
Circle the object that's taller than the first one.



# Preview

Become a member to unlock  
unrestricted access to both printable  
and online worksheets.

[www.tutoringhour.com](http://www.tutoringhour.com)

