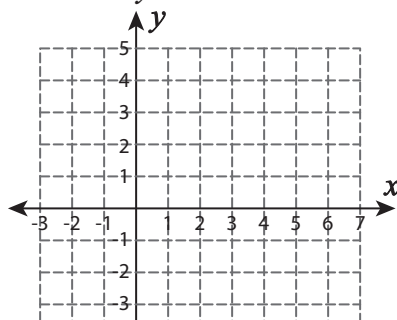


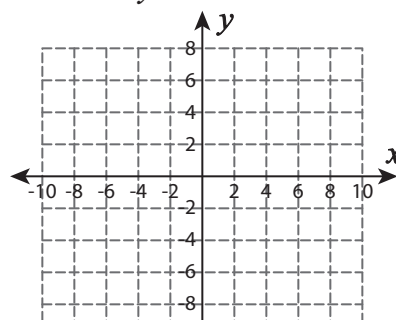
Systems of Equations | Graphing

Graph each system of equation, and find the solution.

1) $y = 8x + 3$; $y = 3 + x$



2) $y = x + 10$; $y = 6$



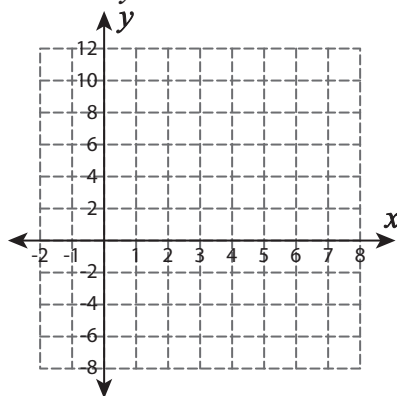
Preview

Become a member to unlock
unrestricted access to both printable
and online worksheets.



www.tutoringhour.com

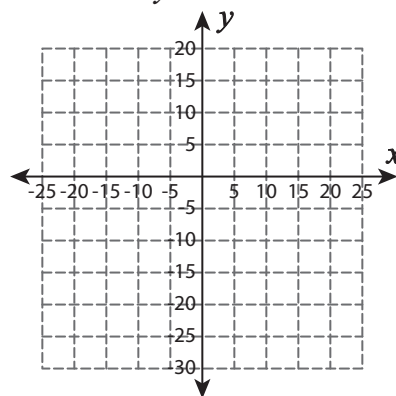
5) $y = 1 + x$; $y = 2x - 6$



Point of intersection: _____

$x =$ _____ ; $y =$ _____

6) $y = -5 + 3x$; $y = x + 5$



Point of intersection: _____

$x =$ _____ ; $y =$ _____