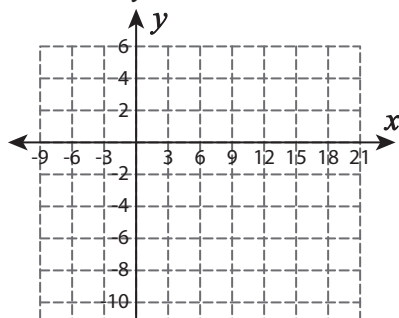


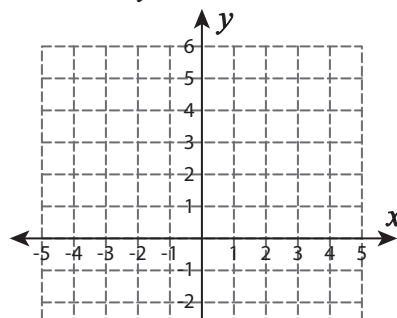
Systems of Equations | Graphing

Graph each system of equation, and find the solution.

1) $y = -x - 2$; $y = -2x + 4$



2) $y = 4x + 1$; $y = 3x + 2$



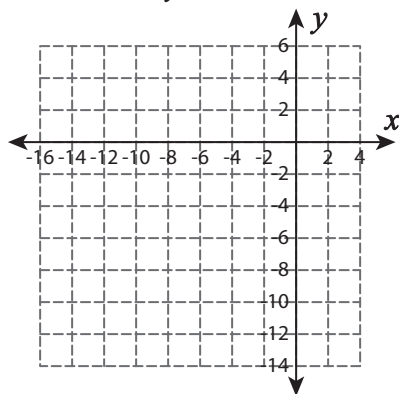
Preview

Become a member to unlock
unrestricted access to both printable
and online worksheets.



www.tutoringhour.com

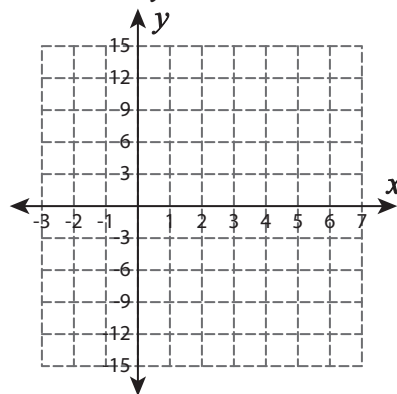
5) $y = -12 - 8x$; $y = 4$



Point of intersection: _____

$x =$ _____ ; $y =$ _____

6) $y = 19 - 7x$; $y = -4x + 7$



Point of intersection: _____

$x =$ _____ ; $y =$ _____