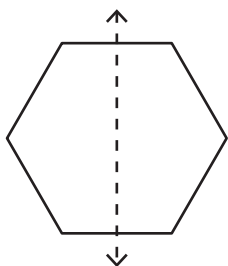


Symmetry

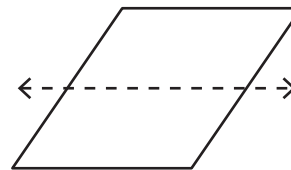
Is the dotted line on each shape a line of symmetry or not?

1)



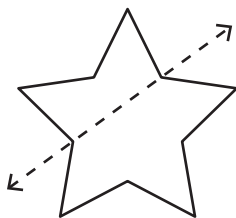
- It is a line of symmetry.
- It is not a line of symmetry.

2)



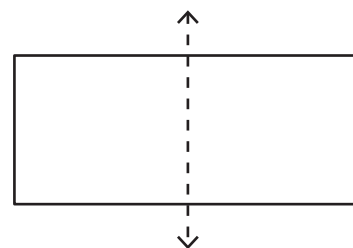
- It is a line of symmetry.
- It is not a line of symmetry.

3)



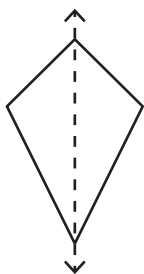
- It is a line of symmetry.
- It is not a line of symmetry.

4)



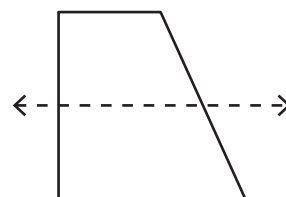
- It is a line of symmetry.
- It is not a line of symmetry.

5)



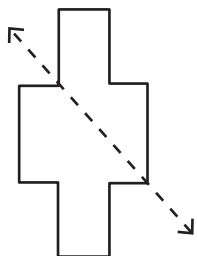
- It is a line of symmetry.
- It is not a line of symmetry.

6)



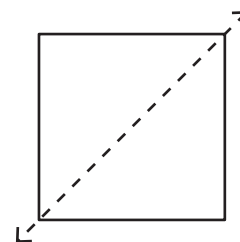
- It is a line of symmetry.
- It is not a line of symmetry.

7)



- It is a line of symmetry.
- It is not a line of symmetry.

8)



- It is a line of symmetry.
- It is not a line of symmetry.