


Subtraction Word Problems

1



There were _____ parrots perched on _____ branches.
Then _____ parrots flew away.



Preview

Become a member to unlock
unrestricted access to both printable
and online worksheets.



www.tutoringhour.com

3



There were _____ cats sitting on a fence.

Then, _____ cats jumped down.

How many cats were left on the fence? _____