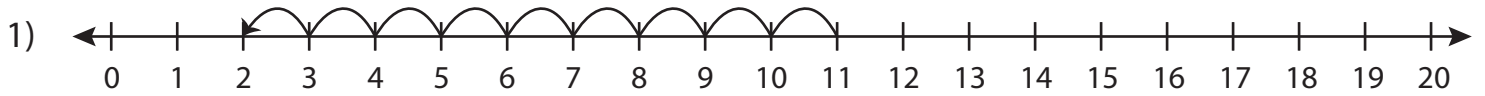


# Number Line Subtraction | 0 - 20

Write the subtraction sentence that describes each model.



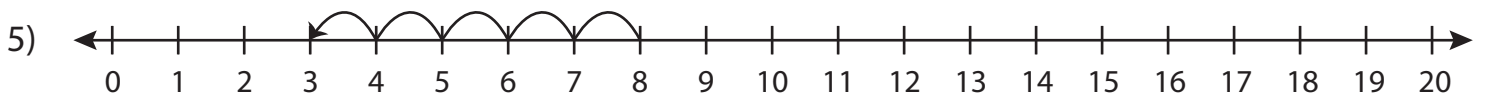
$$\underline{\quad\quad} - \underline{\quad\quad} = \underline{\quad\quad}$$



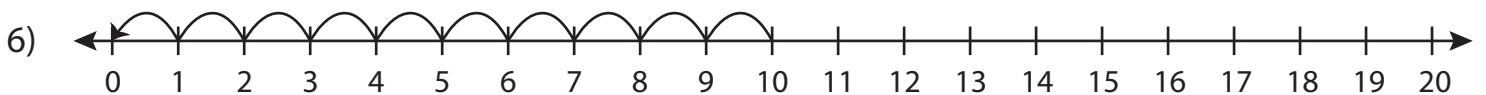
# Preview

Become a member to unlock  
unrestricted access to both printable  
and online worksheets.

www.tutoringhour.com



$$\underline{\quad\quad} - \underline{\quad\quad} = \underline{\quad\quad}$$



$$\underline{\quad\quad} - \underline{\quad\quad} = \underline{\quad\quad}$$