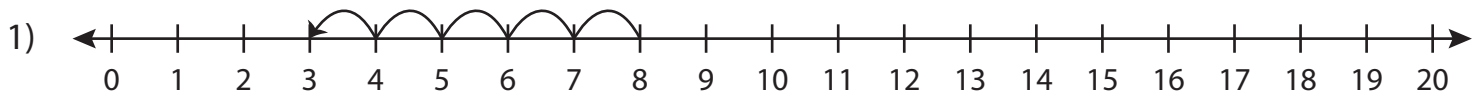
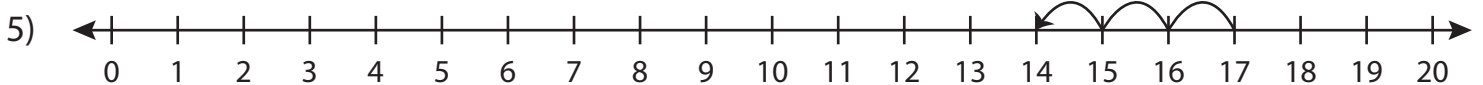
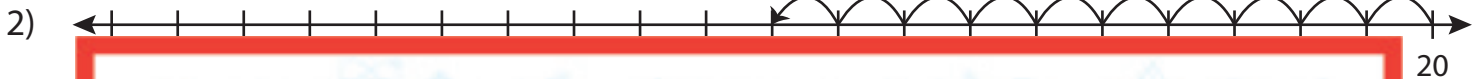


Number Line Subtraction | 0 - 20

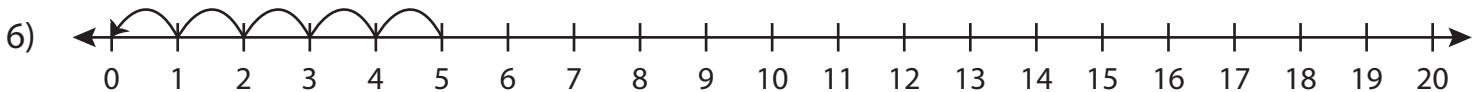
Complete the subtraction sentence that describes each model.



$$8 - \underline{\quad} = 3$$



$$\underline{\quad} - 3 = 14$$



$$5 - 5 = \underline{\quad}$$

Preview

**Become a member to unlock
unrestricted access to both printable
and online worksheets.**

www.tutoringhour.com