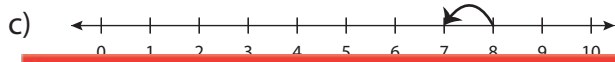
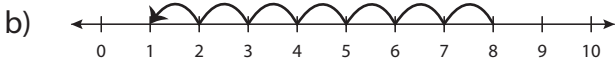
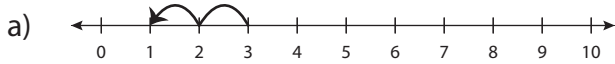


# Number Line Subtraction - MCQ

Identify the correct number line for each subtraction sentence.

1)  $8 - 1 = 7$



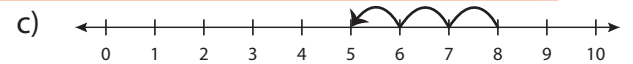
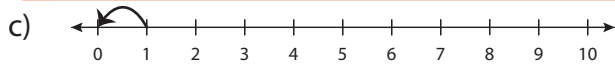
2)  $6 - 2 = 4$



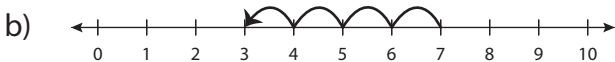
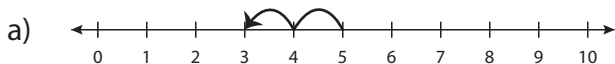
3) 9



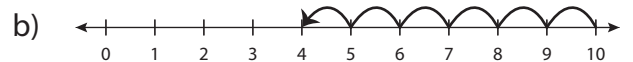
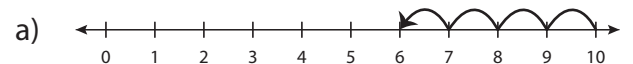
5) 10



7)  $5 - 3 = 2$



8)  $10 - 4 = 6$



# Preview

Become a member to unlock  
unrestricted access to both printable  
and online worksheets.

[www.tutoringhour.com](http://www.tutoringhour.com)

