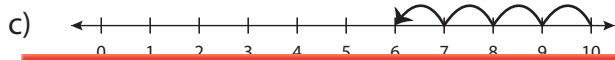
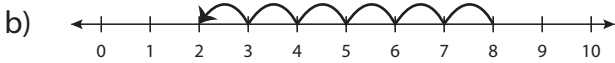
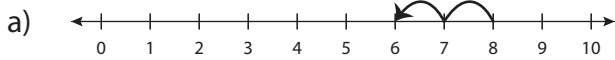


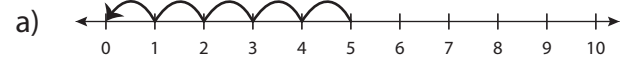
# Number Line Subtraction - MCQ

Identify the correct number line for each subtraction sentence.

1)  $8 - 6 = 2$



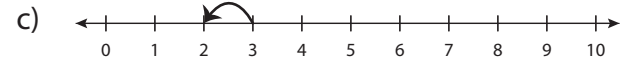
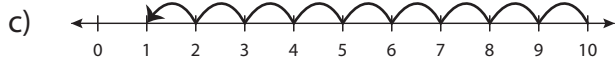
2)  $4 - 4 = 0$



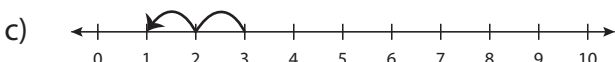
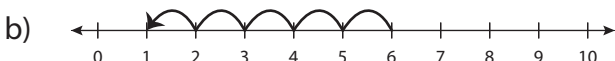
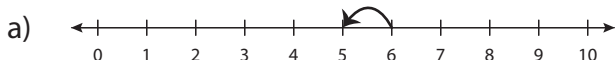
3) 7



5) 10



7)  $6 - 1 = 5$



8)  $5 - 2 = 3$



**Preview**

Become a member to unlock  
unrestricted access to both printable  
and online worksheets.

[www.tutoringhour.com](http://www.tutoringhour.com)

