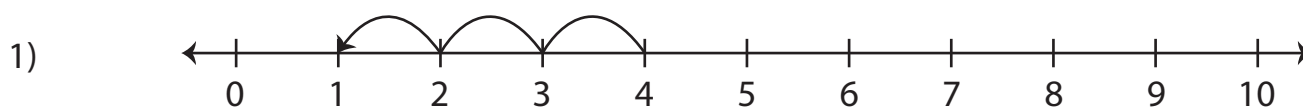


Number Line Subtraction | 0 - 10

Complete the subtraction sentence that describes each model.

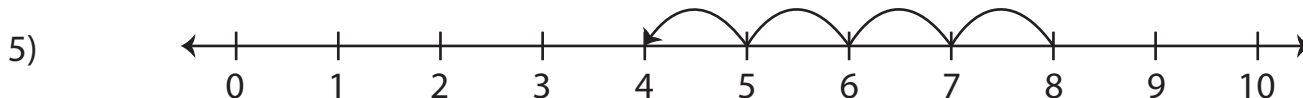


$$4 - \underline{\quad} = 1$$

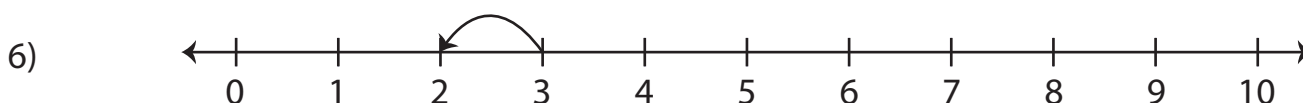


Preview

3) **Become a member to unlock
unrestricted access to both printable
and online worksheets.**



$$8 - \underline{\quad} = 4$$



$$\underline{\quad} - 1 = 2$$