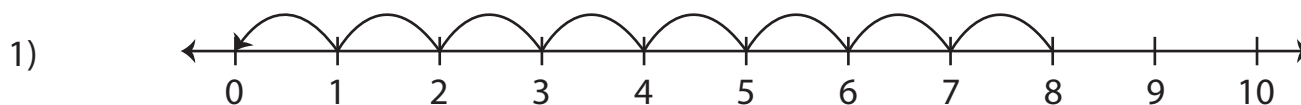


# Number Line Subtraction | 0 - 10

Complete the subtraction sentence that describes each model.



$$\underline{\quad} - 8 = 0$$

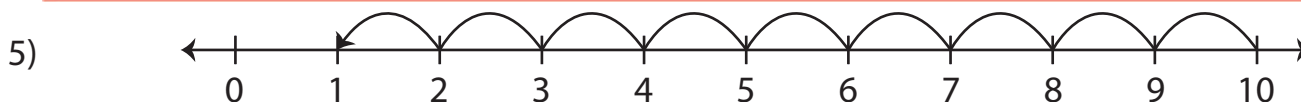


# Preview

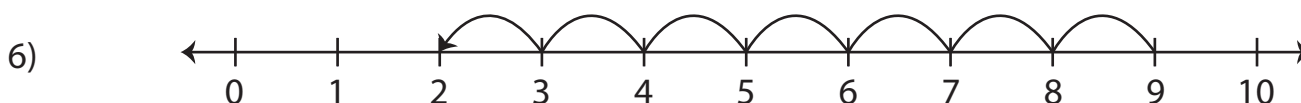
3) **Become a member to unlock**  
 4) **unrestricted access to both printable**  
**and online worksheets.**



www.tutoringhour.com



$$\underline{\quad} - 9 = 1$$



$$9 - \underline{\quad} = 2$$