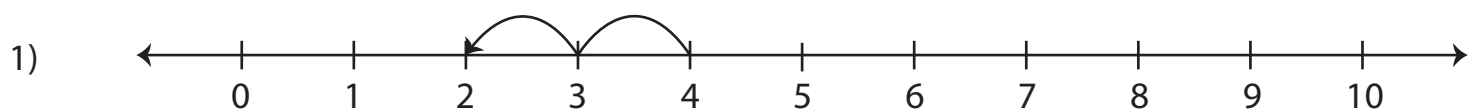


Number Line Subtraction | 0 - 10

Identify the correct subtraction sentence for each number line.



a) $4 - 4 = 0$

b) $4 - 2 = 2$

c) $2 - 2 = 1$

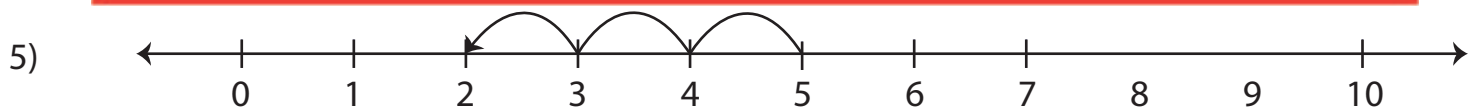
d) $5 - 4 = 1$



3) **Preview**

Become a member to unlock
unrestricted access to both printable
and online worksheets.

www.tutoringhour.com

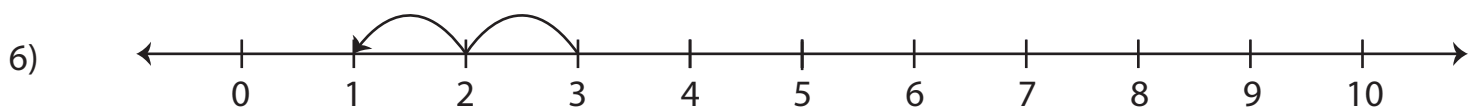


a) $6 - 2 = 4$

b) $5 - 3 = 2$

c) $6 - 4 = 2$

d) $5 - 2 = 3$



a) $8 - 3 = 5$

b) $3 - 1 = 2$

c) $7 - 2 = 5$

d) $3 - 2 = 1$