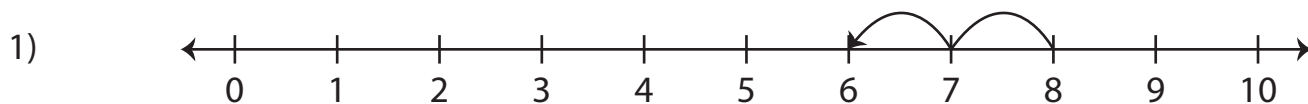
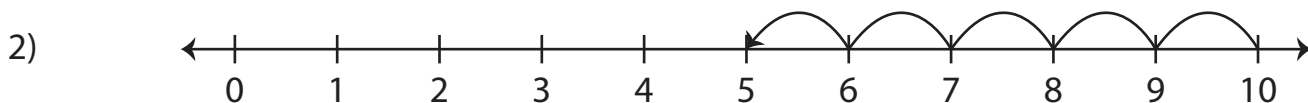


Number Line Subtraction | 0 - 10

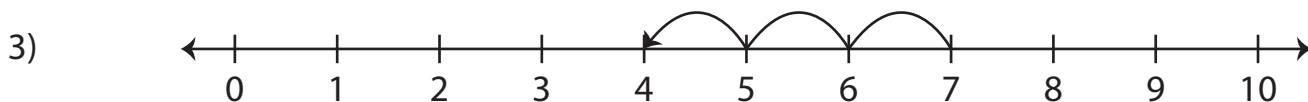
Read each number line and find the difference.



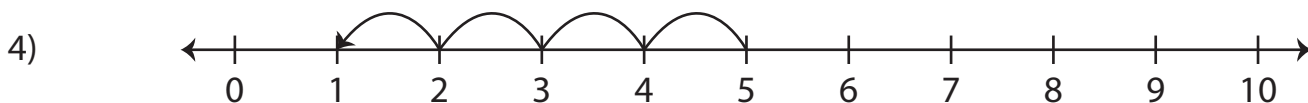
$$8 - 2 = \underline{\hspace{2cm}}$$



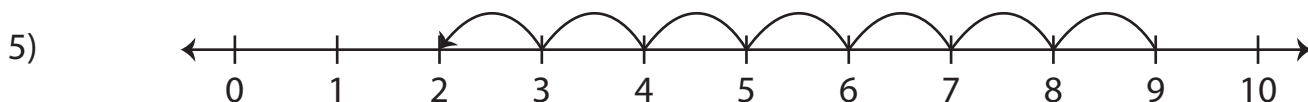
$$10 - 5 = \underline{\hspace{2cm}}$$



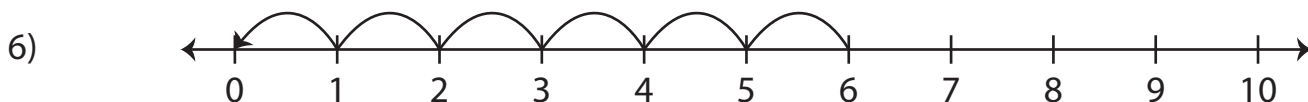
$$7 - 3 = \underline{\hspace{2cm}}$$



$$5 - 4 = \underline{\hspace{2cm}}$$



$$9 - 7 = \underline{\hspace{2cm}}$$



$$6 - 6 = \underline{\hspace{2cm}}$$