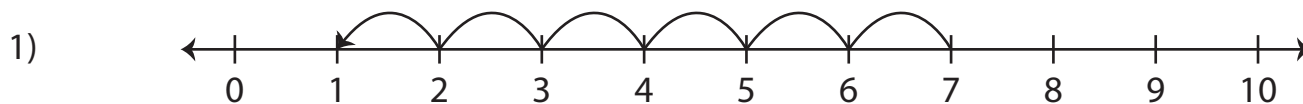
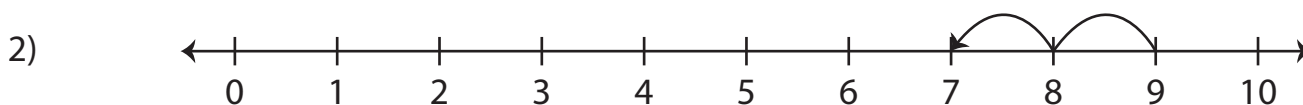


# Number Line Subtraction | 0 - 10

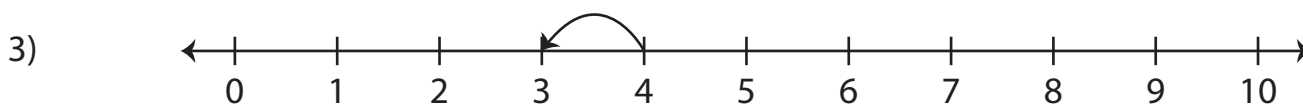
Read each number line and find the difference.



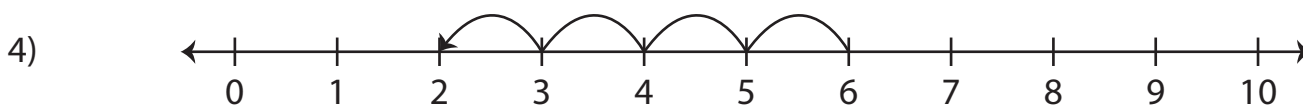
$$7 - 6 = \underline{\hspace{2cm}}$$



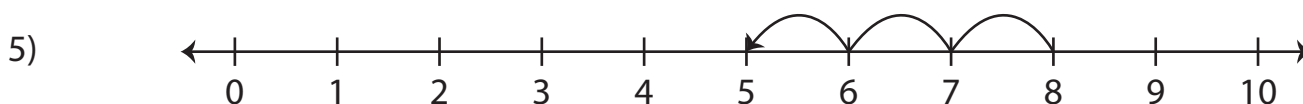
$$9 - 2 = \underline{\hspace{2cm}}$$



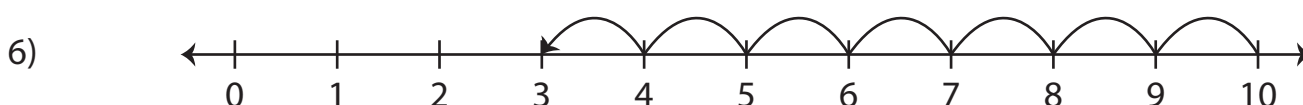
$$4 - 1 = \underline{\hspace{2cm}}$$



$$6 - 4 = \underline{\hspace{2cm}}$$



$$8 - 3 = \underline{\hspace{2cm}}$$



$$10 - 7 = \underline{\hspace{2cm}}$$