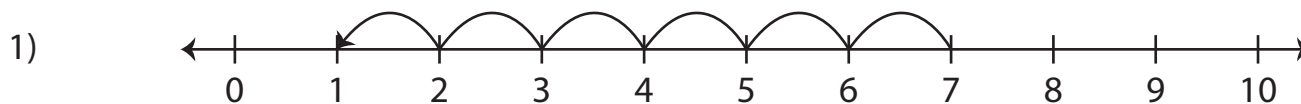


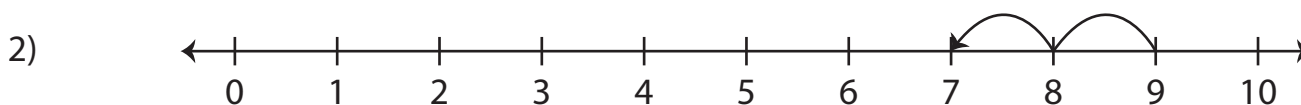
Number Line Subtraction | 0 - 10

Answer Key

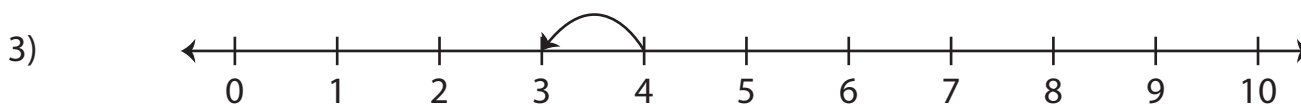
Read each number line and find the difference.



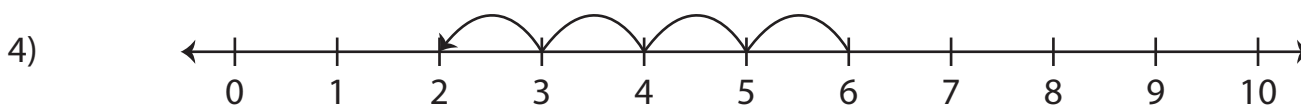
$$7 - 6 = \underline{\quad 1 \quad}$$



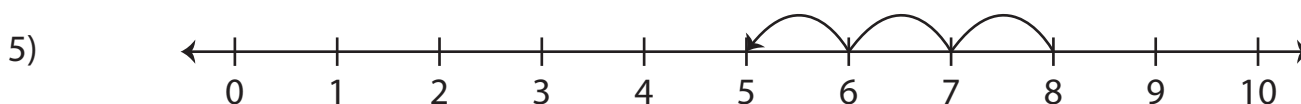
$$9 - 2 = \underline{\quad 7 \quad}$$



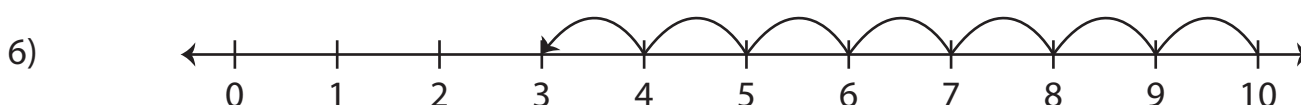
$$4 - 1 = \underline{\quad 3 \quad}$$



$$6 - 4 = \underline{\quad 2 \quad}$$



$$8 - 3 = \underline{\quad 5 \quad}$$



$$10 - 7 = \underline{\quad 3 \quad}$$