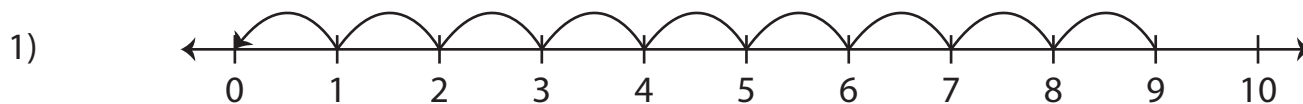
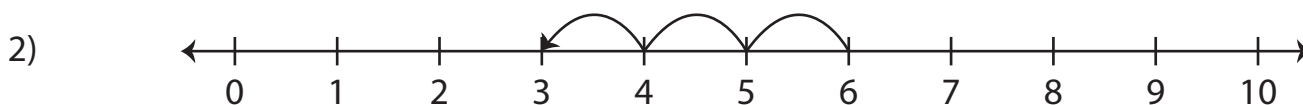


# Number Line Subtraction | 0 - 10

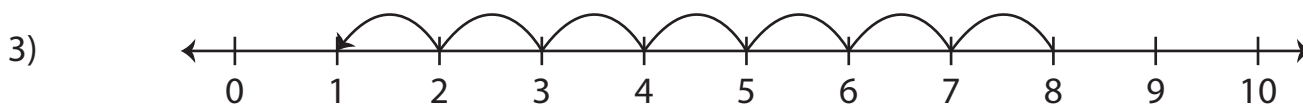
Read each number line and find the difference.



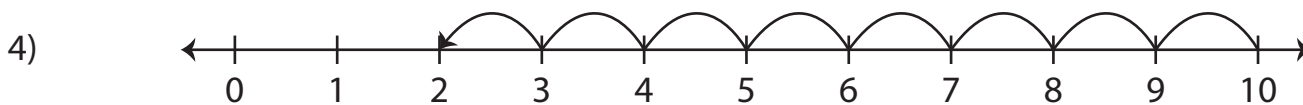
$$9 - 9 = \underline{\hspace{2cm}}$$



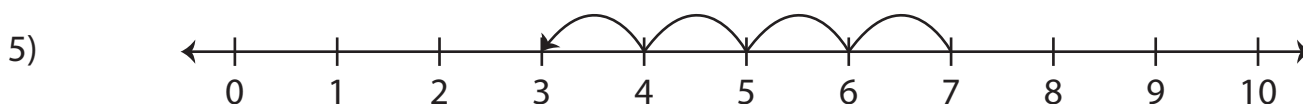
$$6 - 3 = \underline{\hspace{2cm}}$$



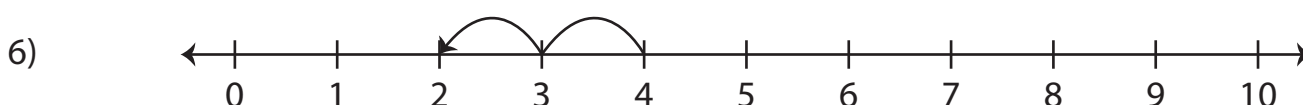
$$8 - 7 = \underline{\hspace{2cm}}$$



$$10 - 8 = \underline{\hspace{2cm}}$$



$$7 - 4 = \underline{\hspace{2cm}}$$



$$4 - 2 = \underline{\hspace{2cm}}$$