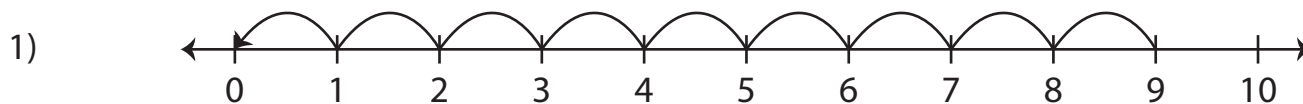


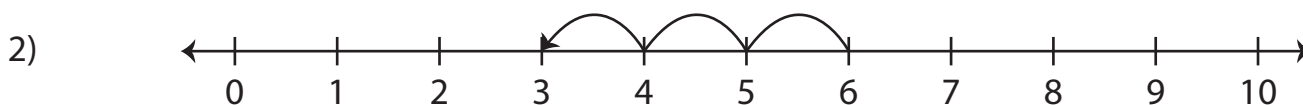
# Number Line Subtraction | 0 - 10

Answer Key

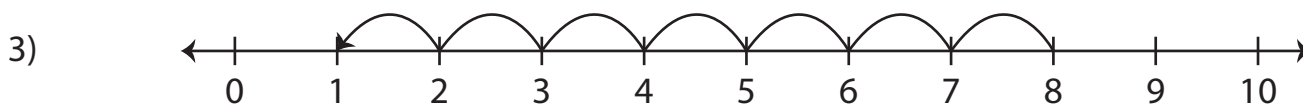
Read each number line and find the difference.



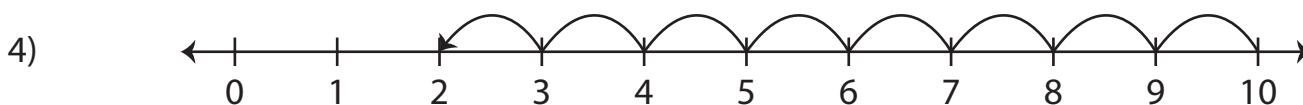
$$9 - 9 = \underline{\quad 0 \quad}$$



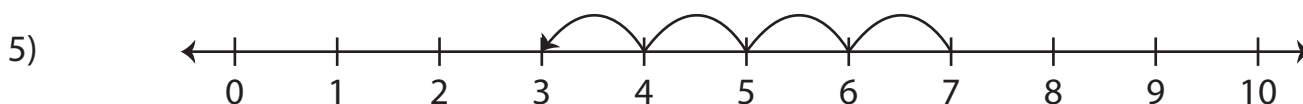
$$6 - 3 = \underline{\quad 3 \quad}$$



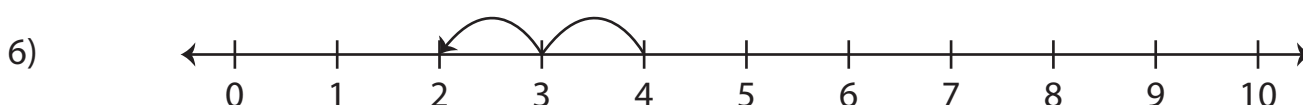
$$8 - 7 = \underline{\quad 1 \quad}$$



$$10 - 8 = \underline{\quad 2 \quad}$$



$$7 - 4 = \underline{\quad 3 \quad}$$



$$4 - 2 = \underline{\quad 2 \quad}$$