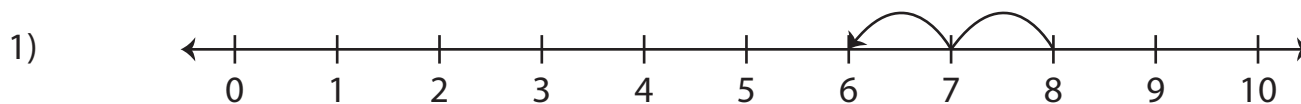


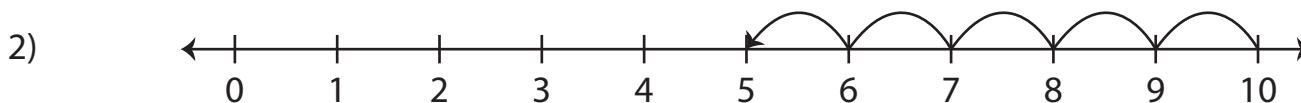
Number Line Subtraction | 0 - 10

Answer Key

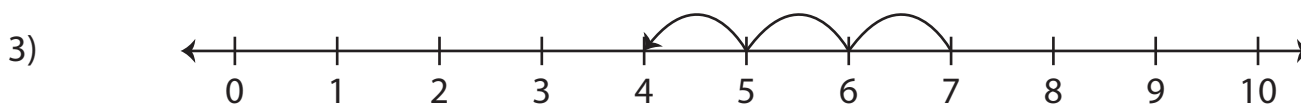
Read each number line and find the difference.



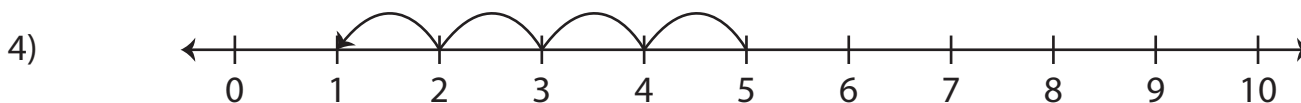
$$8 - 2 = \underline{\quad 6 \quad}$$



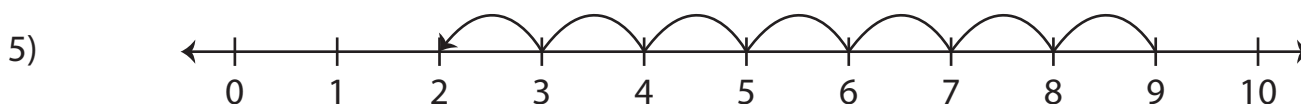
$$10 - 5 = \underline{\quad 5 \quad}$$



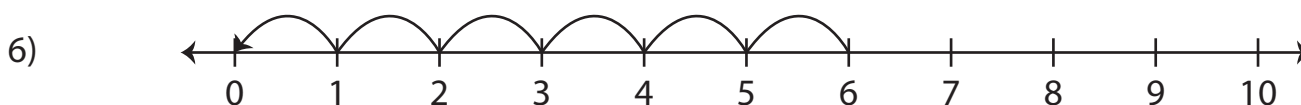
$$7 - 3 = \underline{\quad 4 \quad}$$



$$5 - 4 = \underline{\quad 1 \quad}$$



$$9 - 7 = \underline{\quad 2 \quad}$$



$$6 - 6 = \underline{\quad 0 \quad}$$