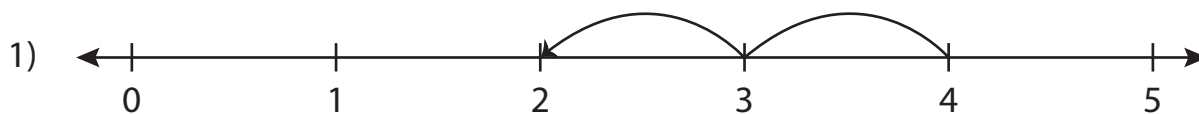


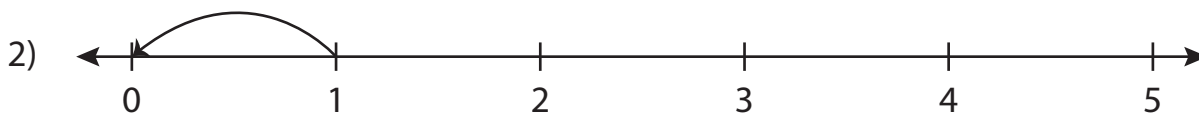
Number Line Subtraction | 0 - 5

Answer Key

Read each number line and solve the problem.



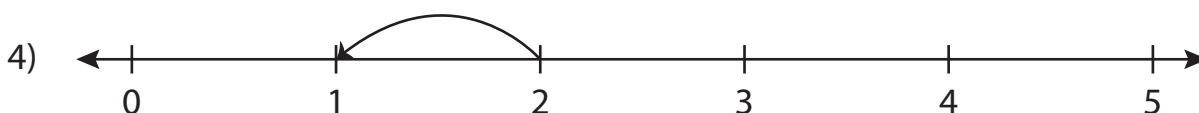
$$4 - 2 = \boxed{2}$$



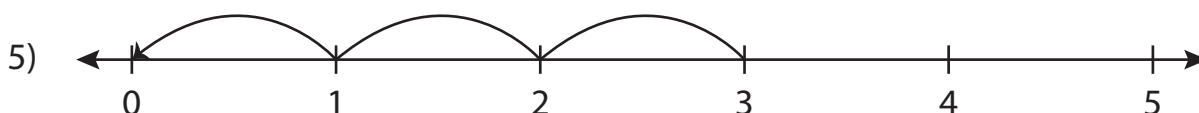
$$1 - 1 = \boxed{0}$$



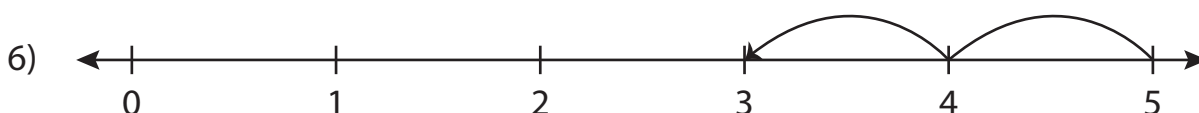
$$5 - 4 = \boxed{1}$$



$$2 - 1 = \boxed{1}$$



$$3 - 3 = \boxed{0}$$



$$5 - 2 = \boxed{3}$$