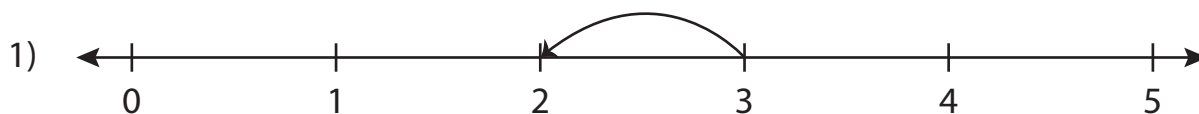


Number Line Subtraction | 0 - 5

Answer Key

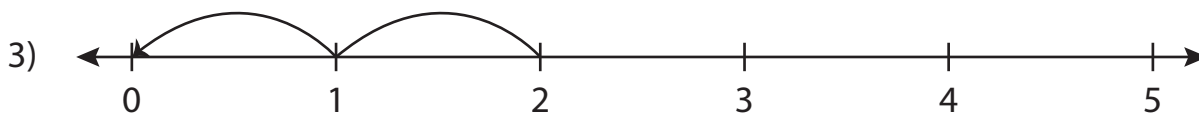
Read each number line and solve the problem.



$$3 - 1 = \boxed{2}$$



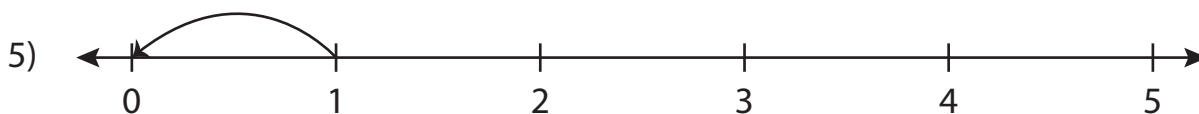
$$5 - 3 = \boxed{2}$$



$$2 - 2 = \boxed{0}$$



$$4 - 3 = \boxed{1}$$



$$1 - 1 = \boxed{0}$$



$$3 - 2 = \boxed{1}$$