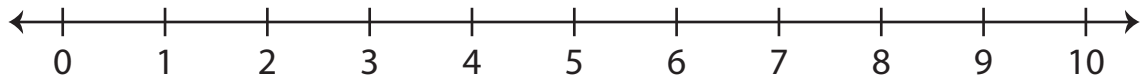


# Number Line Subtraction | 0 - 10

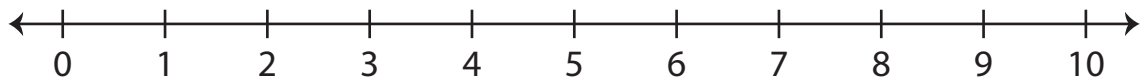
---

Indicate hops on each number line and complete the subtraction sentences.

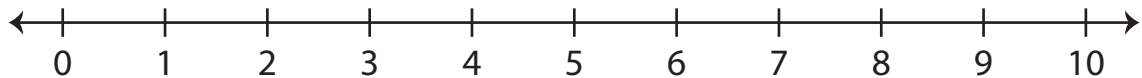
1)  $10 - 2 = \underline{\quad}$



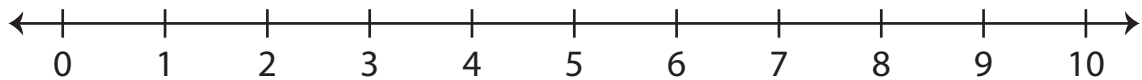
2)  $5 - 4 = \underline{\quad}$



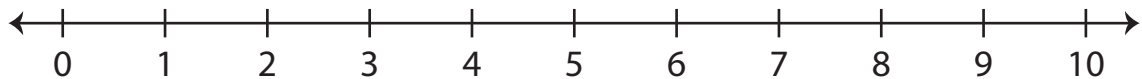
3)  $8 - 8 = \underline{\quad}$



4)  $6 - 3 = \underline{\quad}$



5)  $9 - 7 = \underline{\quad}$



6)  $2 - 1 = \underline{\quad}$

