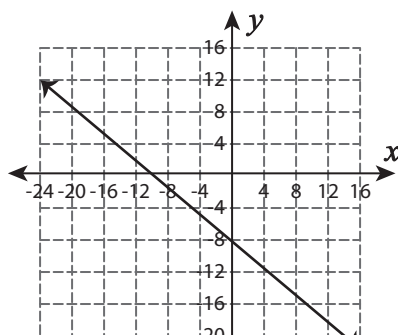


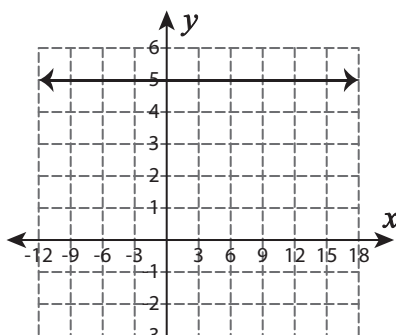
# Types of Slope

A) Identify the slope in each graph as positive, negative, zero, or undefined.

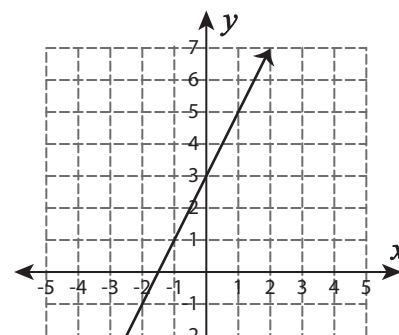
1)



2)



3)



4)

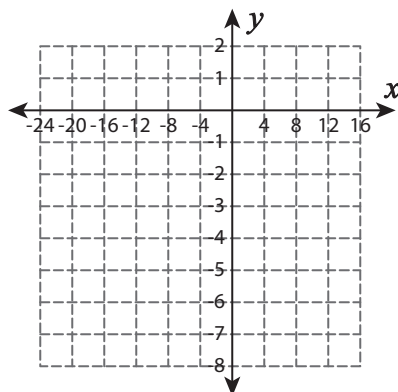
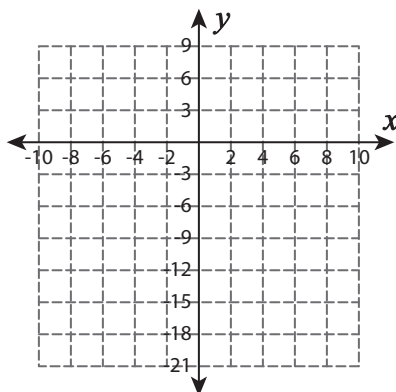
# Preview

Become a member to unlock  
unrestricted access to both printable  
and online worksheets.



[www.tutoringhour.com](http://www.tutoringhour.com)

B) I

1)  $(-8, 1)$  and  $(4, -7)$ 2)  $(-4, -18)$  and  $(4, 6)$ 3)  $(6, 8)$  and  $(6, -16)$ 